



# Math Review Day

**Write today's date.** Example: **Tuesday, March 25, 2020**

1. Today is \_\_\_\_\_

**Task 2: Place Value Review. All work will get handed into your teacher today. 😊**

Write each number in expanded form.

1) 125 \_\_\_\_\_ **100 + 20 + 5**

2) 14 \_\_\_\_\_

3) 632 \_\_\_\_\_


4) 347 \_\_\_\_\_

5) 94 \_\_\_\_\_

6) 560 \_\_\_\_\_

**Directions: Write each number in standard form and word form.**


7)



Standard form: \_\_\_\_\_

Word form: \_\_\_\_\_


8)



Standard form: \_\_\_\_\_

Word form: \_\_\_\_\_

9)




Standard form: \_\_\_\_\_

Expanded form: \_\_\_\_\_

Word form: \_\_\_\_\_

10)



Standard form: \_\_\_\_\_

Expanded form: \_\_\_\_\_

Word form: \_\_\_\_\_

**Addition and Subtraction within 1, 000 Review. All work will get handed into your teacher today. 😊**

**Directions: Add or subtract with or without regrouping.**

1

$$\begin{array}{r} 92 \\ + 28 \\ \hline \end{array}$$

2

$$\begin{array}{r} 36 \\ + 42 \\ \hline \end{array}$$

3

$$\begin{array}{r} 158 \\ + 59 \\ \hline \end{array}$$

4

$$\begin{array}{r} 361 \\ + 35 \\ \hline \end{array}$$

5

$$\begin{array}{r} 166 \\ + 233 \\ \hline \end{array}$$

6

$$\begin{array}{r} 546 \\ + 444 \\ \hline \end{array}$$

$$\begin{array}{r} 1 \quad 68 \\ - 26 \\ \hline \end{array}$$

$$\begin{array}{r} 2 \quad 54 \\ - 38 \\ \hline \end{array}$$

$$\begin{array}{r} 3 \quad 129 \\ - 25 \\ \hline \end{array}$$

$$\begin{array}{r} 4 \quad 632 \\ - 59 \\ \hline \end{array}$$

$$\begin{array}{r} 5 \quad 925 \\ - 87 \\ \hline \end{array}$$

$$\begin{array}{r} 6 \quad 545 \\ - 523 \\ \hline \end{array}$$

**Directions: Regroup to subtract across zeros.**

$$\begin{array}{r} 1 \quad 200 \\ - 63 \\ \hline \end{array}$$

$$\begin{array}{r} 2 \quad 300 \\ - 74 \\ \hline \end{array}$$

$$\begin{array}{r} 3 \quad 500 \\ - 81 \\ \hline \end{array}$$


$$\begin{array}{r} 4 \quad 400 \\ - 87 \\ \hline \end{array}$$

$$\begin{array}{r} 5 \quad 700 \\ - 456 \\ \hline \end{array}$$

$$\begin{array}{r} 6 \quad 900 \\ - 549 \\ \hline \end{array}$$

**Directions:** Use the pictures to help you add and multiply. Fill in the blanks.


1



$$\underline{\quad} + \underline{\quad} = \underline{\quad}$$

$$\underline{\quad} \times \underline{\quad} = \underline{\quad}$$

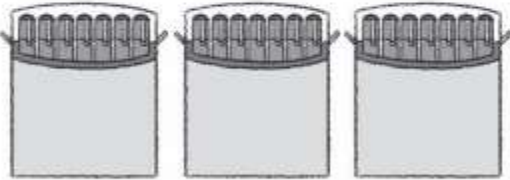
2



$$\underline{\quad} + \underline{\quad} = \underline{\quad}$$

$$\underline{\quad} \times \underline{\quad} = \underline{\quad}$$

3



$$\underline{\quad} + \underline{\quad} + \underline{\quad} = \underline{\quad}$$

$$\underline{\quad} \times \underline{\quad} = \underline{\quad}$$

4



$$\underline{\quad} + \underline{\quad} + \underline{\quad} = \underline{\quad}$$

$$\underline{\quad} \times \underline{\quad} = \underline{\quad}$$

**Note to the Teacher:** If there is anything that is unclear, write a note to me below so we can discuss it together during my office hours today or tomorrow.

**Reminder:** Complete your fact practice!